

Maths CE1 - Période 2

As-tu compris encadrer les nombres ?

Encadre ces nombres entre le précédent et le suivant.

$___ < 26 < ___$

$___ < 4 < ___$

$___ < 40 < ___$

$___ < 59 < ___$

$___ < 31 < ___$

$___ < 12 < ___$

Encadre ces nombres entre deux dizaines.

$___ < 26 < ___$

$___ < 4 < ___$

$___ < 40 < ___$

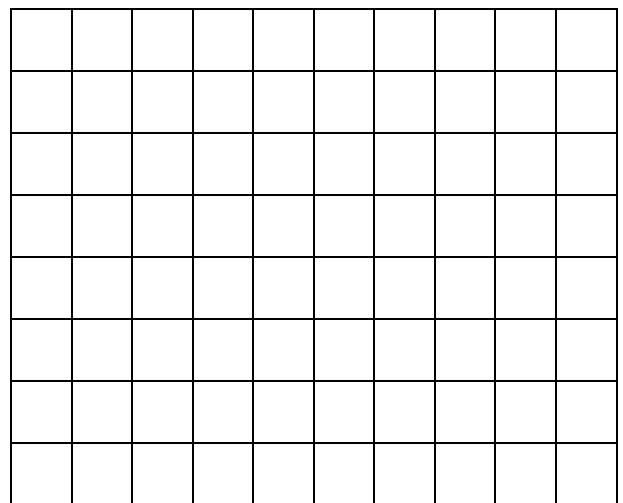
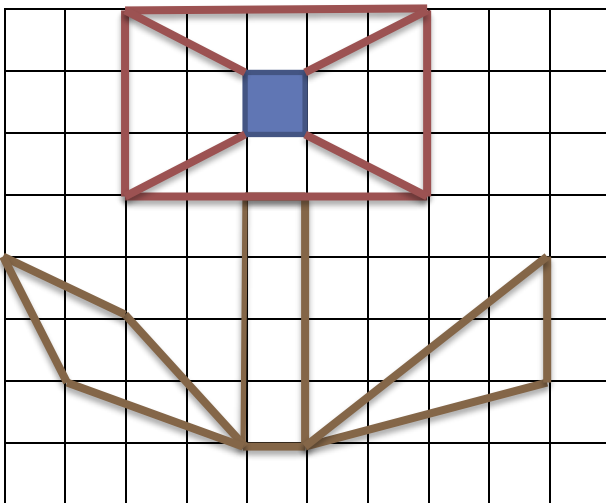
$___ < 59 < ___$

$___ < 31 < ___$

$___ < 12 < ___$

As-tu compris reproduire une figure sur un quadrillage ?

Reproduis cette fleur.



As-tu compris la droite graduée ?

Relie les nombres à leur place sur la droite graduée.

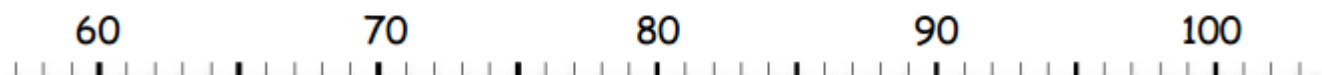
59

72

88



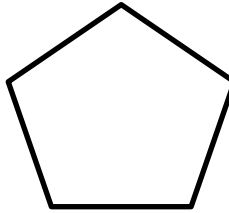



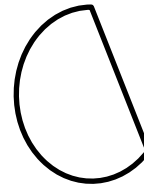
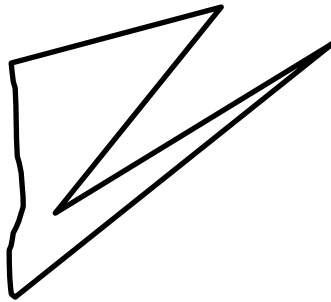
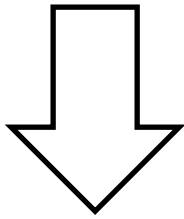

95

97



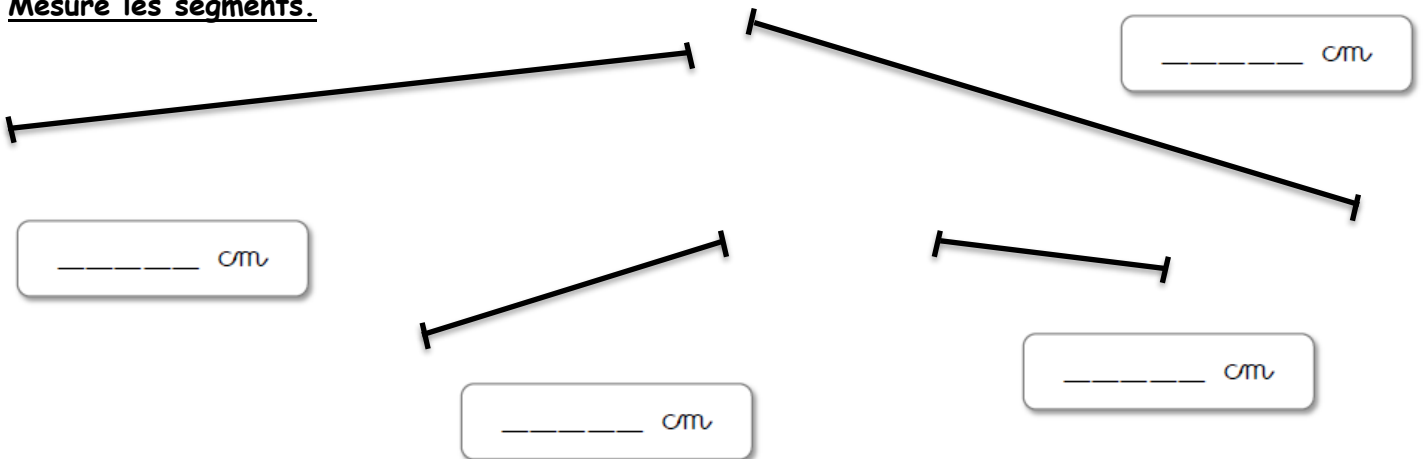
As-tu compris les polygones ?

Colorie les polygones.



As-tu compris mesurer une longueur ?


Mesure les segments.



As-tu compris l'addition ?

Pose et calcule.

$67 + 21 =$



$28 + 46 =$

